



4

Calculate  $\frac{1}{7}$  of 553

1 mark

5

Calculate  $\frac{3}{5}$  of 240 kg


1 mark

6

Calculate  $\frac{3}{5}$  of £160

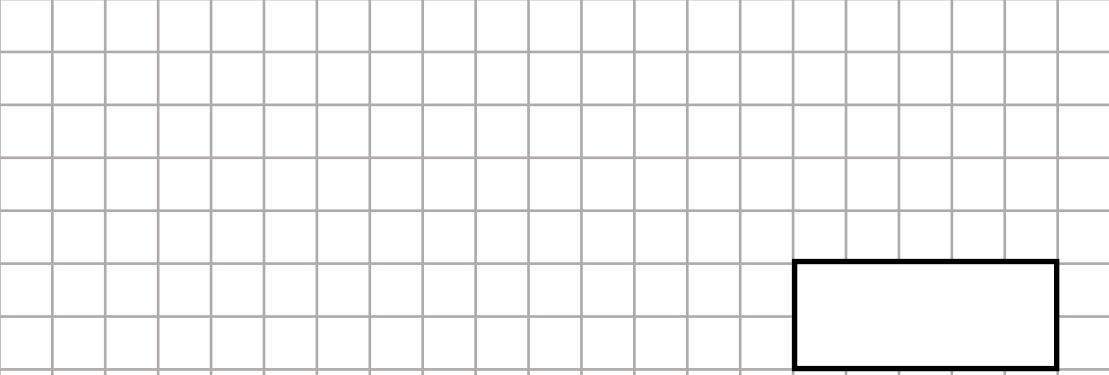
1 mark

7

$$5372 \div 17 =$$



1 mark

8

$$75361 \div 31 =$$


1 mark

9

$$13188 \div 42$$


1 mark